



Name _____

Date _____

These boxes represent cubes.



Color 2 cubes red. Color 3 cubes green.




How many cubes did you color?

Is this stick the same length as the gray stick? YES NO

Together 2 cubes and 3 cubes are the same length as 5.

Color 1 cube red and the rest green.



How many cubes did you color?

Is this stick the same length as the gray stick? YES NO

Together 1 cube and 4 cubes are the same length as _____.